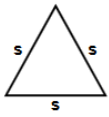





- 1) Find area of triangle  
 $s = 100$  ft



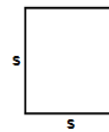
Answer: \_\_\_\_\_

- 2) Find perimeter of square having each side (s) equals 17 m



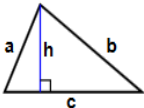
Answer: \_\_\_\_\_

- 3) Find area of square having each side (s) equals 8 ft




Answer: \_\_\_\_\_

- 4) Find perimeter of triangle  
 $h = 83$ ,  $a = 88$  in,  
 $b = 93$  in,  $c = 96$  in



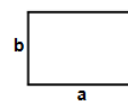
Answer: \_\_\_\_\_

- 5) Find perimeter of square having each side (s) equals 82 cm



Answer: \_\_\_\_\_

- 6) Find perimeter of rectangle having sides  $a = 81$  m and  $b = 71$  m




Answer: \_\_\_\_\_

- 7) Find perimeter of square having each side (s) equals 3 m



Answer: \_\_\_\_\_

- 8) Find perimeter of square having each side (s) equals 34 m



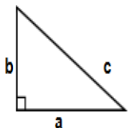
Answer: \_\_\_\_\_

- 9) Find area of square having each side (s) equals 75 ft



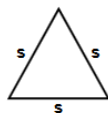
Answer: \_\_\_\_\_

- 10) Find area of triangle  
 $a = 60$  m,  $b = 99$  m



Answer: \_\_\_\_\_

- 11) Find area of triangle  $s = 35$  cm



Answer: \_\_\_\_\_

- 12) Find area of square having each side (s) equals 85 cm



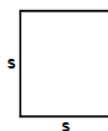
Answer: \_\_\_\_\_

- 13) Find perimeter of square having each side (s) equals 38 cm



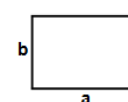
Answer: \_\_\_\_\_

- 14) Find area of square having each side (s) equals 34 in



Answer: \_\_\_\_\_

- 15) Find area of rectangle having sides  $a = 96$  m and  $b = 81$  m



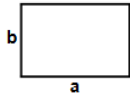
Answer: \_\_\_\_\_

Name: \_\_\_\_\_

February 21, 2019



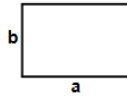
16)



Find area of rectangle having sides  $a = 97$  in and  $b = 72$  in

Answer: \_\_\_\_\_

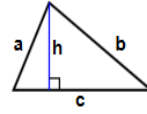
17)



Find area of rectangle having sides  $a = 39$  ft and  $b = 13$  ft

Answer: \_\_\_\_\_

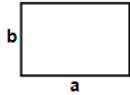
18)



Find area of triangle  
 $h = 47$  m,  $a = 91$  m,  
 $b = 99$  m,  $c = 100$  m

Answer: \_\_\_\_\_


19)



Find area of rectangle having sides  $a = 72$  m and  $b = 10$  m

Answer: \_\_\_\_\_

20)



Find area of square having each side ( $s$ ) equals 80 ft

Answer: \_\_\_\_\_

**Total: \_\_\_\_ / 20**

Name: \_\_\_\_\_

Sr: 21022019-996

February 21, 2019

MATHS WORKSHEET  
GENERATOR



11-PLUS  
SATS  
GCSES



**Answers:**

- |                      |            |           |                       |            |            |            |
|----------------------|------------|-----------|-----------------------|------------|------------|------------|
| 1) 4330.1270189222ft | 2) 68m     | 3) 64ft   | 4) 277in              | 5) 328cm   | 6) 304m    | 7) 12m     |
| 8) 136m              | 9) 5625ft  | 10) 2970m | 11) 530.44055981797cm | 12) 7225cm | 13) 152cm  | 14) 1156in |
| 15) 7776m            | 16) 6984in | 17) 507ft | 18) 2326.5m           | 19) 720m   | 20) 6400ft |            |